

Elements, Compounds, and Mixtures

Classify each of the pictures below by placing the correct label in the blanks below:

A= Element

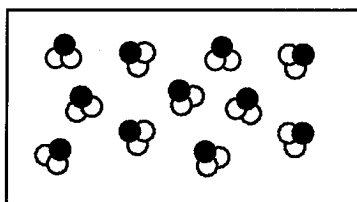
B= Compound

C= Mixture of elements

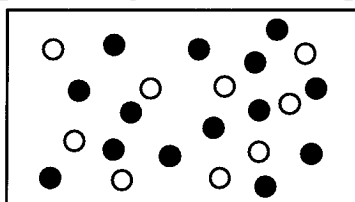
D= Mixture of compounds

E= Mixture of elements and compounds

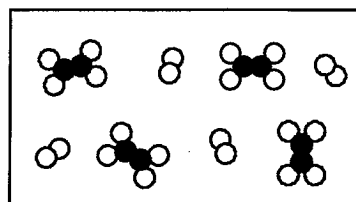
Each circle represents an atom and each different color represents a different kind of atom. If two atoms are touching then they are bonded together.



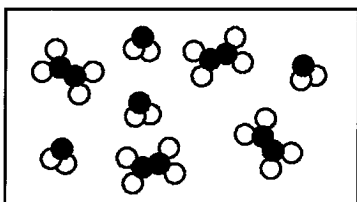
1) _____



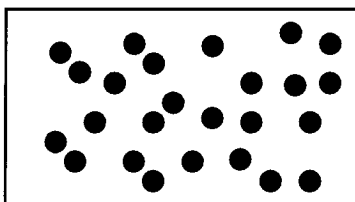
2) _____



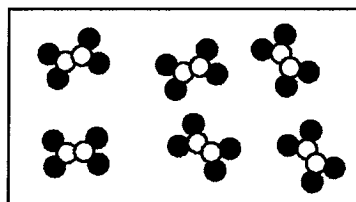
3) _____



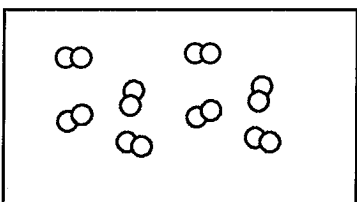
4) _____




5) _____



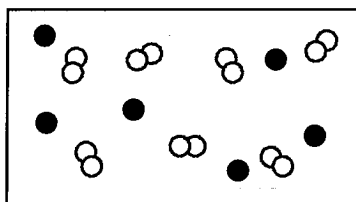
6) _____



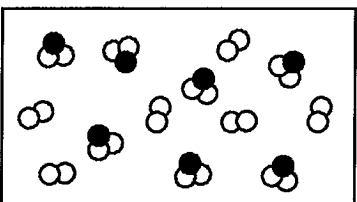
7) _____



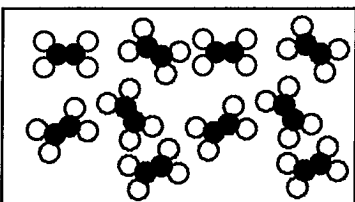
8) _____



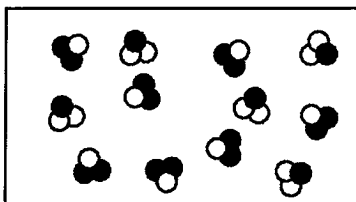
9) _____



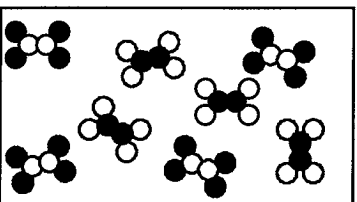
10) _____



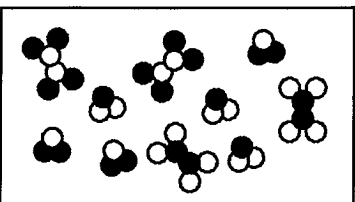
11) _____



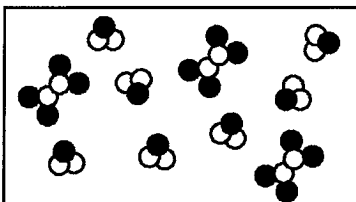
12) _____



13) _____



14) _____



15) _____